



Pusat Tuisyen Skor Impian

LATIHAN SET 4

TAHUN 3

## Latihan 1 Bahasa Melayu

Tulis kata kerja transitif dalam ayat di bawah.

1- Saya suka membaca buku cerita

.....

2- Adam sedang menonton televisyen

.....

3- Setiap ahad, ayah bersenam di padang.

.....

4- Aminah sedang menanam pokok di halaman rumah

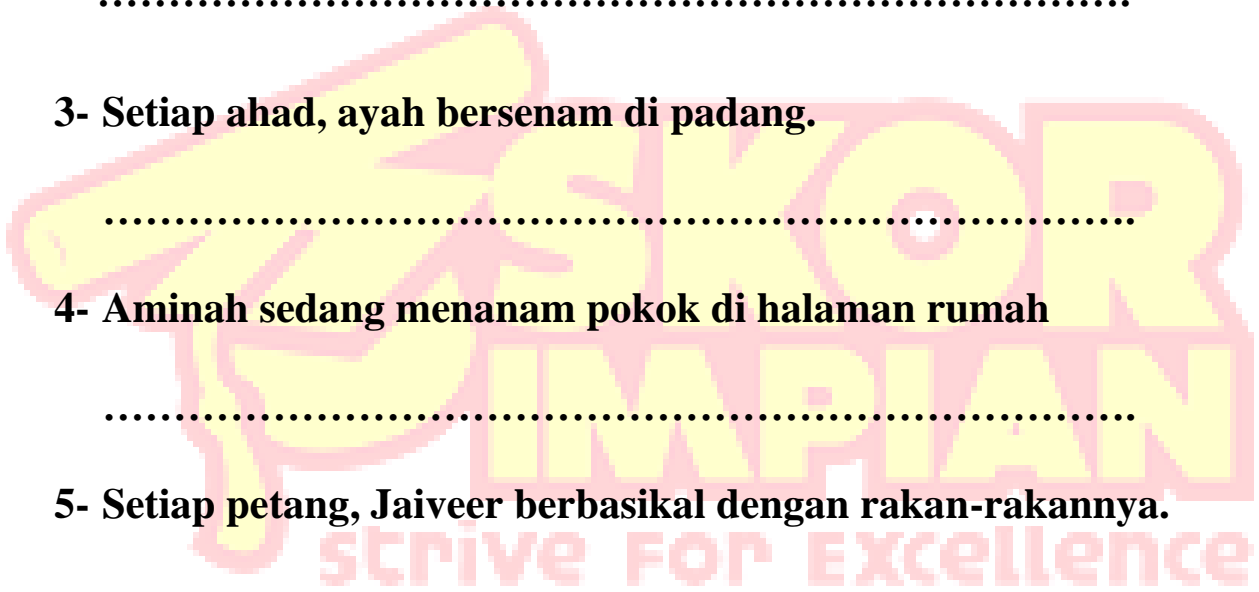
.....

5- Setiap petang, Jaiveer berbasikal dengan rakan-rakannya.

.....

6- Ibu sedang memasak ayam goreng di dapur

.....



## Latihan 2 Bahasa Melayu

Tukarkan ayat aktif kepada ayat pasif

1- menolong =

ditolong

2- memasak =

3- menendang =

4- memukul =


5- membeli =

6- memandu =

7- menipu =

8- menulis =

9- membaca =



## Latihan 1 Bahasa Inggris

Circle the correct answer.

1- Aryan ..... to the gym yesterday

- A. go
- B. going
- C. went

2- The baby..... crying an hour ago.

- A. was
- B. were
- C. is

3- I ..... with my kitten this morning.

- A. play
- B. played
- C. plays

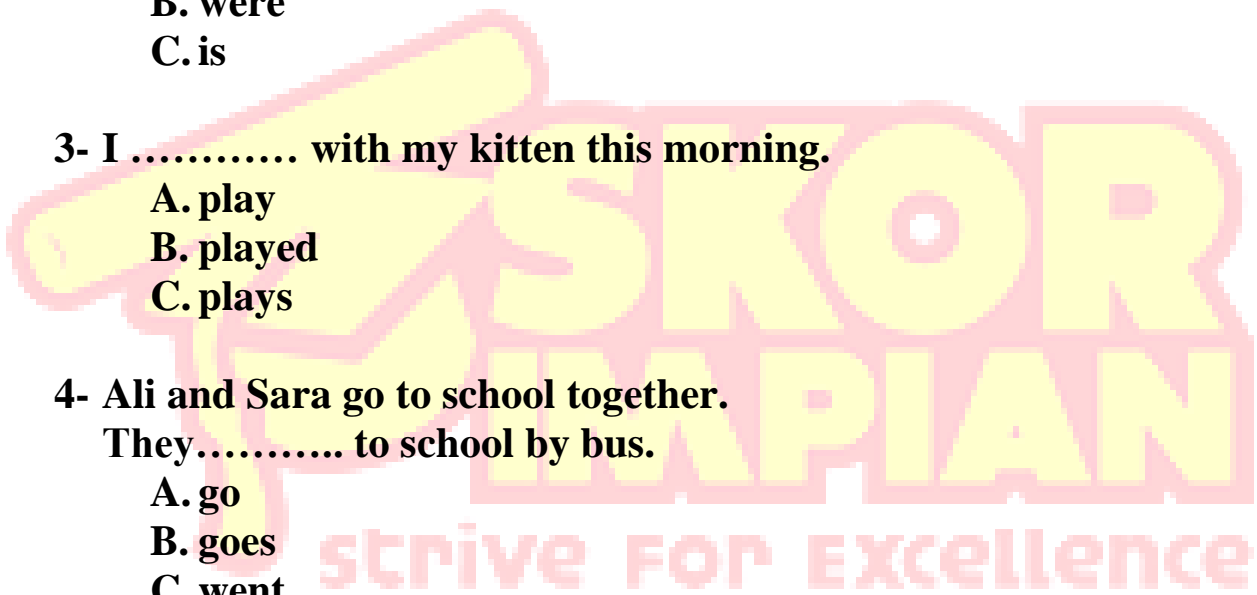
4- Ali and Sara go to school together.

They..... to school by bus.

- A. go
- B. goes
- C. went

5- Alex ..... resting in his room now.

- A. was
- B. is
- C. are



## Latihan 2 Bahasa Inggeris

Fill in the blanks with words given.

village

orchard

ran

stick

fruits

many

shameful

plucked

Encik Rosman has an ..... It is at the edge of a ..... There are ..... types of fruit trees. There are a lot of .....

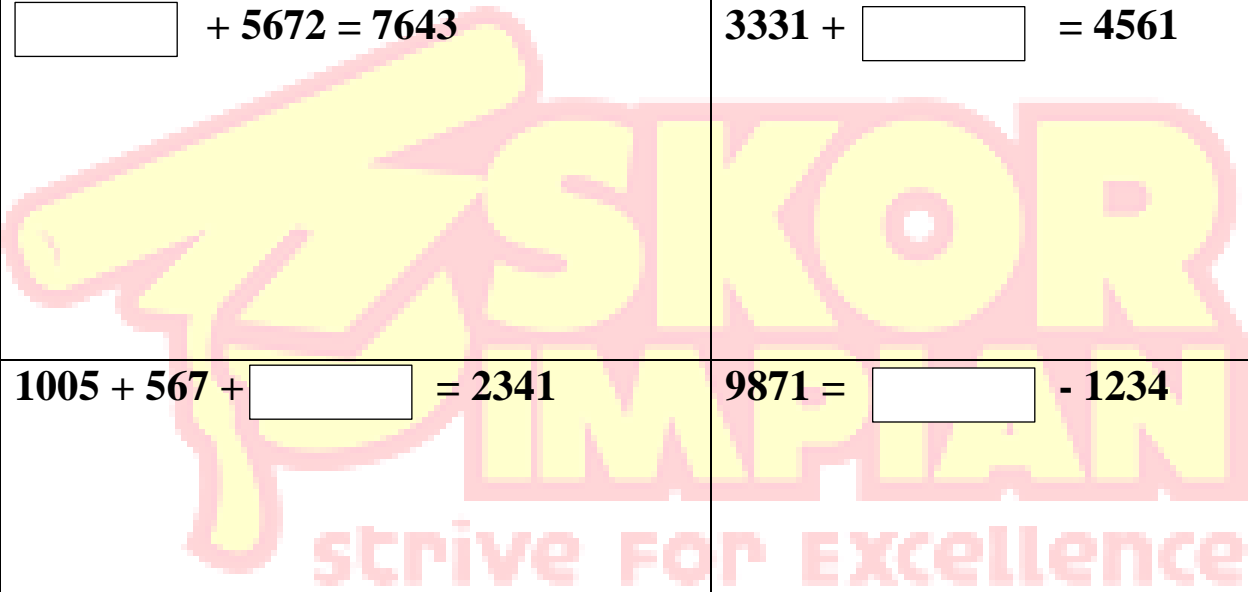
One day, two boys..... some mangoes in Encik Rosman's orchard. Encik Rosman chased them with a ..... They ..... away from the orchard. They boys went home.....

## Latihan 1 Matematik

Selesaikan hasil tambah/tolak.

Solve the sum

$4562 + \square = 7653$	$6753 + \square = 10,234$
$\square + 5672 = 7643$	$3331 + \square = 4561$
$1005 + 567 + \square = 2341$	$9871 = \square - 1234$
$6789 + 5467 - \square = 11248$	$7654 + 2345 - \square = 5413$



## Latihan 2 Matematik

**Selesaikan**  
**Solve**

**1- Kelas 1 Amanah mempunyai 45 murid. 25 orang daripada mereka ialah murid perempuan. Berapakah murid lelaki?**  
**Class of 1 Amanah have 45 students. 25 of them are girls. How many boys are there in class 1 Amanah?**

**2- Ibu membeli 30 biji telur. 3 daripadanya busuk. Berapa biji telur yang bukan busuk?**  
**Mother bought 30 eggs. 3 of it are rotten. How many eggs are not rotten?**

**3- Zara mempunyai 115 biji guli. Damia pula mempunyai 134 guli. Berapakah jumlah guli mereka?**  
**Zara have 115 marbles whereas Damia have 134 marbles. Find total number of marbles.**

**4- Ramlah menanam 454 pokok kelapa. 236 pokok kelapa telah berbuah. Berapa pokok yang masih belum berbuah?**  
**Ramlah planted 454 coconut trees. 236 have bear fruits. How many trees are without fruits?**

## Latihan 1 Sains

**Gariskan jawapan yang betul.**

**Underline the correct answer.**

- 1- Gigi (kacip / geraham) berfungsi untuk memotong makanan.  
(Incisor / molar) teeth is used to cut food.**
- 2- Gigi (kacip / taring) berfungsi untuk mengoyak makanan.  
(Incisor / canine) teeth is used to tear food.**
- 3- Gigi (geraham / taring) berfungsi untuk menghancurkan dan melumat makanan.  
(Molar / canini) teeth is used to crush and grind food.**
- 4- Tanpa (gigi / tangan) makanan tidak dapat dicerna dengan betul.  
Without (teeth / hand), food cannot be digested properly.**
- 5- Kita menggunakan gigi (geraham, kacip) untuk mengigit epal.  
We use (molar / incisor) teeth to bite apple.**



## Latihan 2 Sains

Labelkan struktur gigi di bawah.

Label the structure of teeth

