



Pusat Tuisyen Skor Impian

LATIHAN SET 1

TAHUN 3

CIKGU SINGH

011-21157908

Latihan 1 Bahasa Melayu

Lengkapkan ayat-ayat dibawah menggunakan penjodoh bilangan yang sesuai

pasang	buah	sikat	biji	bilah
naskah	bentuk	batang	buku	

- 1- Ayah sedang membaca se..... surat khabar
- 2- Ain membeli se..... pisang dari pasar pagi
- 3- Kakak menggunakan se..... gunting untuk memotong kertas.
- 4- Amirul menghadiahkan se..... cincin kepada Siti
- 5- Ibu sedang menjahit se..... seluar
- 6- Marsha mempunyai tiga pen dalam kotak penselnya.
- 7- Aina membeli se..... radio yang baru.
- 8- Ramlah memberi beberapa guli kepada Amin.
- 9- Melisa membeli se..... sabun dari kedai runcit.

Latihan 2 Bahasa Melayu

Bina ayat menggunakan perkataan dan gambar yang diberi

1- Mengayuh

.....
.....



2- Menari

.....
.....




3- Berjalan

.....
.....




4- Menonton

.....
.....



5- Mengecat

.....
.....



Latihan 1 Bahasa Inggris

Read the dialogue below and answer the questions given.

Aminah and her parents are having their dinner.

Mother: Aminah do you want some fried fish?

Aminah: No. I don't like fish

Mother: Then what do you like?

Aminah: I would like some vegetables and fried chicken.

Father: Aminah would you prefer to drink hot chocolate or coffee?

Aminah: I don't like hot chocolate. Please give me a cup of hot coffee dad.

1- Aminah and her parents are having

2- Aminah doesn't like to eat

3- Aminah likes to eat

4- Aminah doesn't like to drink.....

5- Aminah likes to drink

Latihan 2 Bahasa Inggris

Rearrange the words to form correct sentences

1- two have I ears

.....

2- name is Ali My

.....

3- cooking My is kitchen the in mother

.....

4- watching He movie a

.....

5- reading Azmin newspaper is

.....

6- washing She her is clothes

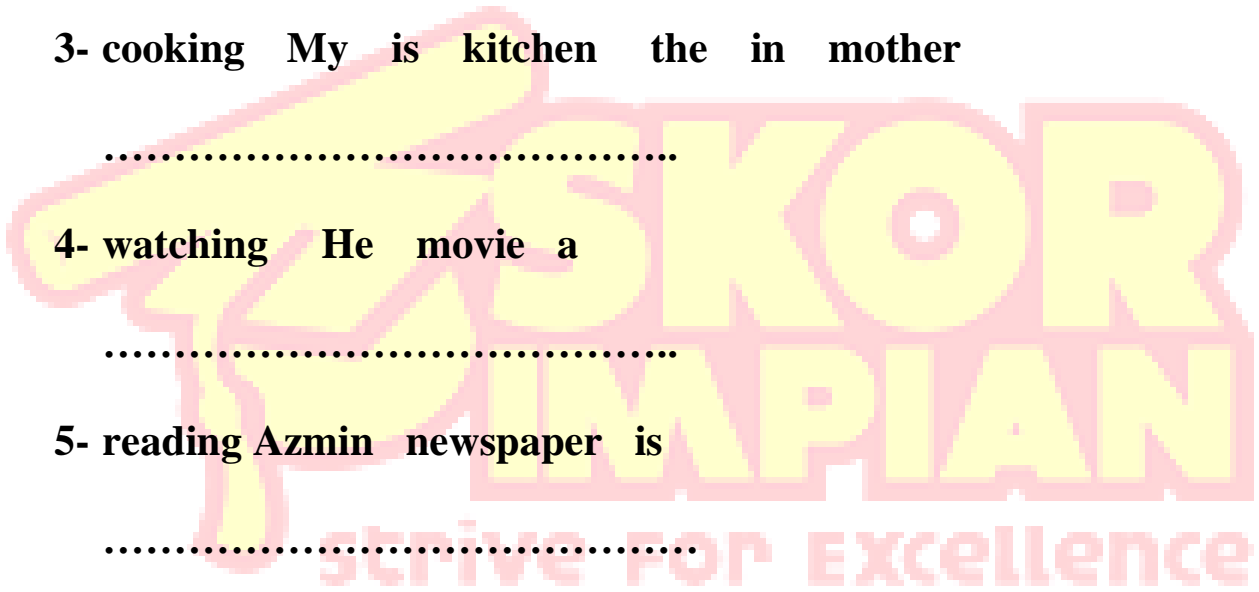
.....

7- playing in football are field They the

.....

8- is Alex in room the sleeping

.....



Latihan 1 Matematik

Tulis nilai tempat dan nilai digit bagi digit yang berwarna merah

Write place value and digit value for the red coloured digit

	Nilai tempat Place value	Nilai tempat Digit Value
2310		
6751		
1007		
9569		
7015		
5083		
4567		
1809		
5761		

Latihan 2 Matematik

Tuliskan nombor berikut dalam perkataan.

Write the following numbers in words.

1- 2045 =

2- 1981 =

3- 3470 =

4- 5004 =

5- 8751 =

Latihan 3 Matematik

Tuliskan nombor berikut dalam angka.

Write the following numbers in numerals.

1- Empat ribu lima ratus / Four thousand five hundred

.....

2- Tiga ribu empat ratus enam puluh satu/ Three thousand four hundred and sixty one

.....

3- Lapan ribu satu/ Eight thousand and one

.....

4- Lima ribu tujuh ratus tiga/ Five thousand seven hundred and three

.....

Latihan 1 Sains

Buat pemerhatian berdasarkan gambar yang diberi dan lengkapkan jadual berikut.

Make observation based on the given photo and complete the table



Ciri-ciri Characteristic	Pemerhatian Observation	Organ deria yang digunakan Sensory organ used
Shape of fruit Bentuk buah		
Colour of fruit Warna buah		
Smell of fruit Bau buah		
Texture of fruit Permukaan kulit		
Taste of fruit Rasa buah		

Latihan 2 Sains

Padankan jenis deria berdasarkan gambar yang diberi.
Match the types of senses based on photo given.

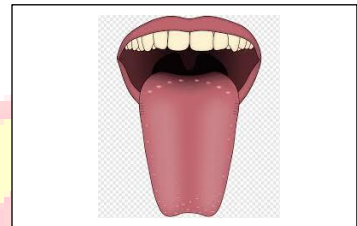
1-

Pemerhatian
Sight



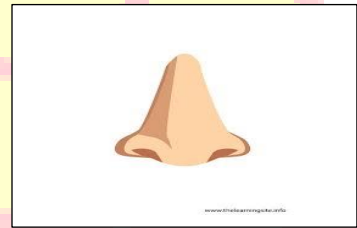
2-

Pendengaran
Hearing



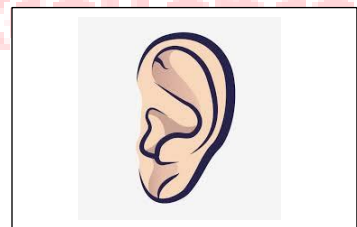
3-

Rasa
Taste



4-

Bau
Smell



5-

Sentuhan
Touch

